

Deinigh na crúiscíní suas go dtí an méid thíos.



900ml



200ml



500ml

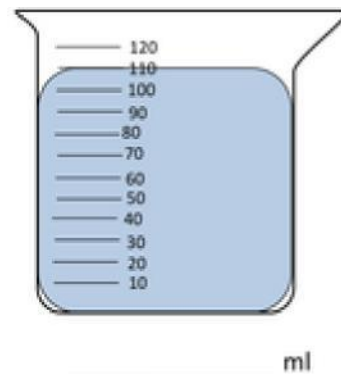
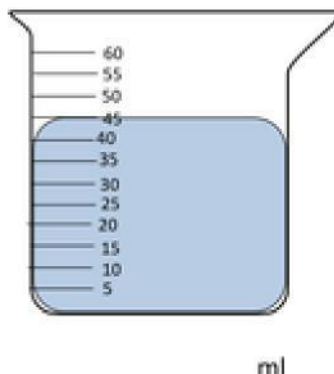
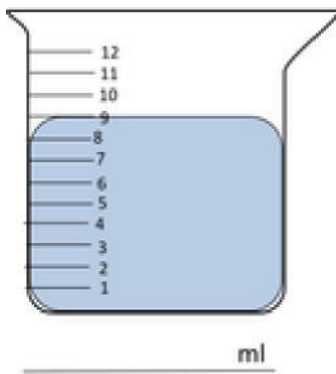
Líon na freagraí thíos:

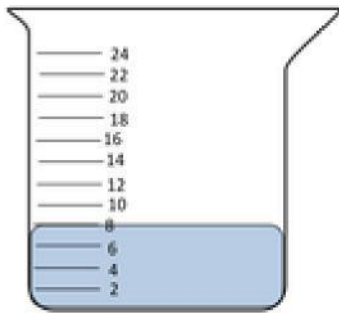
$$400\text{ml} + 200\text{ml} = \underline{\hspace{2cm}}$$

$$300\text{ml} + 100\text{ml} = \underline{\hspace{2cm}}$$

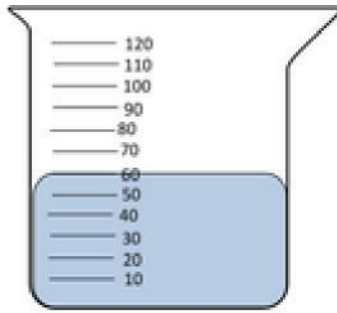
$$650\text{ml} + 50\text{ml} = \underline{\hspace{2cm}}$$

An féidir leat an méid uisce i ngach crúiscín a scríobh síos?

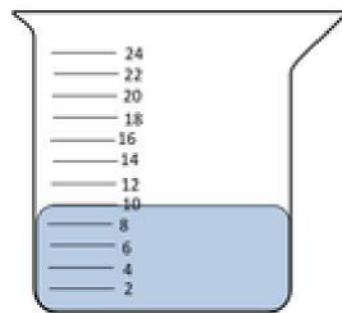




ml



ml



ml